



Colégio São Marcos, Educação Infantil, Ensino Fundamental e Médio.

Jandaia do Sul, _____

Aluno (a): _____

Professora: _____ 2º ano

ATIVIDADES DO DIA 28/08/2020

Geografia

Apostila páginas 174 a 178.


Português

Apostila páginas 52 e 53.

Matemática no caderno

- 1) Fazer a tabuada do 4 e do 5 no caderno.
- 2) Desenhe as figuras e faça a adição e a multiplicação:


a)



$$\underline{\quad} + \underline{\quad} + \underline{\quad} + \underline{\quad} + \underline{\quad} = \underline{\quad}$$

$$5 \times 2 = \underline{\quad}$$


b)



$$\underline{\quad} + \underline{\quad} + \underline{\quad} + \underline{\quad} + \underline{\quad} = \underline{\quad}$$

$$5 \times 4 = \underline{\quad}$$


c)



$$\underline{\quad} + \underline{\quad} + \underline{\quad} + \underline{\quad} + \underline{\quad} = \underline{\quad}$$

$$5 \times 1 = \underline{\quad}$$


d)



$$\underline{\quad} + \underline{\quad} + \underline{\quad} + \underline{\quad} + \underline{\quad} = \underline{\quad}$$

$$5 \times 3 = \underline{\quad}$$


e)



$$\underline{\quad} + \underline{\quad} + \underline{\quad} + \underline{\quad} + \underline{\quad} = \underline{\quad}$$

$$5 \times 5 = \underline{\quad}$$


f)



$$\underline{\quad} + \underline{\quad} + \underline{\quad} + \underline{\quad} + \underline{\quad} = \underline{\quad}$$

$$5 \times 6 = \underline{\quad}$$


g)



$$\underline{\quad} + \underline{\quad} + \underline{\quad} + \underline{\quad} + \underline{\quad} = \underline{\quad}$$

$$5 \times 8 = \underline{\quad}$$


h)



$$\underline{\quad} + \underline{\quad} + \underline{\quad} + \underline{\quad} + \underline{\quad} = \underline{\quad}$$

$$5 \times 7 = \underline{\quad}$$

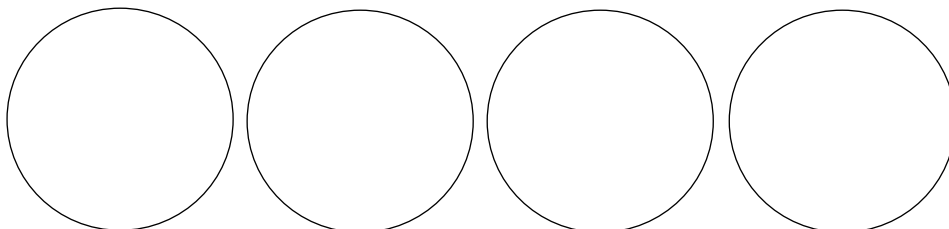
i)



$$\underline{\quad} + \underline{\quad} + \underline{\quad} + \underline{\quad} + \underline{\quad} = \underline{\quad}$$

$$5 \times 10 = \underline{\quad}$$

j)



$$\underline{\quad} + \underline{\quad} + \underline{\quad} + \underline{\quad} = \underline{\quad}$$

$$5 \times 9 = \underline{\quad}$$

COOREÇÃO DAS ATIVIDADES DO DIA 27/08/2020

Geografia

Página 173

- 1) A principal diferença entre elas é a quantidade de água.
- 2) O local é o mesmo, porém sua fisionomia é diferente – são, portanto, diferentes paisagens.

Matemática

Página 55

$$2) 7 \times 2 = 2 + 2 + 2 + 2 + 2 + 2 + 2 = 14$$

Ela tem 14 figurinhas.

$$3) 9 \times 2 = 2 + 2 + 2 + 2 + 2 + 2 + 2 + 2 + 2 = 18$$

Formou 9 pares.

Página 56

$$4) 5 + 5 + 5 + 5 = 4 \times 5 = 20$$

20 pacotes de ração.

$$5) 7 + 7 = 2 \times 7 = 14$$

Precisou de 14 sabonetes.

$$6) 8 + 8 + 8 = 3 \times 8 = 24$$

Organizou 24 livros na prateleira.

Página 57

$$7) 2 - 4 - 6 - 8 - 10 - 12 - 14 - 16 - 18 - 20$$

pares

$$8) 6 + 6 + 6 = 18$$

$$8 + 8 + 8 = 24$$

$$3 + 3 + 3 + 3 = 12$$

$$4 + 4 + 4 + 4 = 16$$

$$5 + 5 + 5 + 5 = 20$$

$$5 + 5 + 5 + 5 + 5 = 25$$

Português


Página 50

1)

No diagrama, circule sete adjetivos que qualificam o gatinho adotado por Caio. Depois, reescreva as palavras encontradas.

| | | | | | | | | | | | | |
|---|---|---|---|---|---|---|---|---|---|---|---|---|
| M | A | L | H | A | D | O | N | K | S | E | A | A |
| P | A | A | C | I | G | P | A | M | C | I | Y | R |
| I | G | U | L | O | S | O | V | A | I | E | A | T |
| A | I | U | S | F | I | A | I | N | S | S | F | E |
| F | U | F | G | T | N | F | U | H | G | P | A | I |
| U | C | H | E | I | R | O | S | O | P | E | Z | R |
| A | S | U | V | A | I | R | I | S | H | R | L | O |
| F | U | F | X | J | N | F | U | O | G | T | A | N |
| A | L | E | G | R | E | U | S | P | F | O | L | H |

Malhado, guloso, chetoso, alegre, manhoso.
esperto, atrevido.



Página 51

2) CHICLETE
CHAFARIZ
CHAVE
LIXEIRA
MOCHILA

PEIXE
CACHORRO
ABACAXI
BEXIGA
XÍCARA