



Colégio São Marcos – Educação Infantil, Ensino Fundamental e Médio.

Jandaia do Sul, 16 de outubro de 2020.

Professora: Vanessa Crestani Men

Série: Infantil 4

Aluno (a): _____

Aprendizagens a serem trabalhadas

Numeros

Quantidades

Leia e cante:

Números

0 – 1 – 2 – 3 – 4 – 5 – 6 – 7 – 8 –
9 – 10 – 11 – 12 – 13 – 14 – 15 –
16 – 17 – 18 – 19 – 20 –

Cantar a música dos indiozinhos

E da galinha do vizinho



Aluno (a): _____

Atividade 1

1- COMPLETE A SEQUÊNCIA NUMÉRICA

A row of five penguins holding signs. The first sign has the number 15, the second is blank, the third is blank, the fourth has the number 18, and the fifth is blank.

A row of five chicks holding signs. The first sign is blank, the second has the number 13, the third has the number 14, the fourth is blank, and the fifth is blank.

A row of five penguins holding signs. The first sign is blank, the second has the number 10, the third is blank, the fourth is blank, and the fifth has the number 13.

A row of five chicks holding signs. The first sign is blank, the second is blank, the third has the number 18, the fourth has the number 19, and the fifth is blank.



Colégio São Marcos – Educação Infantil, Ensino Fundamental e Médio.













Jandaia do Sul, 16 de outubro de 2020.

Professora: Vanessa Crestani Men

Série: Infantil 4

Aluno (a): _____

Atividade 2

QUEM MORA ANTES?	QUEM MORA DEPOIS?
 	 
 	 
 	 



Colégio São Marcos – Educação Infantil, Ensino Fundamental e Médio.

Jandaia do Sul, 16 de outubro de 2020.









Professora: Vanessa Crestani Men

Série: Infantil 4

Aluno (a): _____

Atividade 3

1) Conte e descubra quantos animais há em cada conjunto:





Colégio São Marcos – Educação Infantil, Ensino Fundamental e Médio.

Jandaia do Sul, 16 de outubro de 2020.

Professora: Vanessa Crestani Men

Série: Infantil 4

Aluno (a): _____

Atividade 4

Apostila

pág: 24

Falar sobre os meios de comunicação, quais são eles e para que servem.

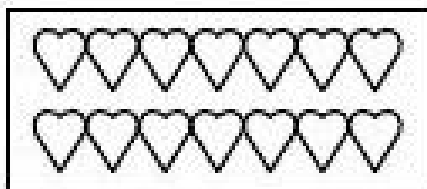
Depois, copiar cada palavra no lugar indicado



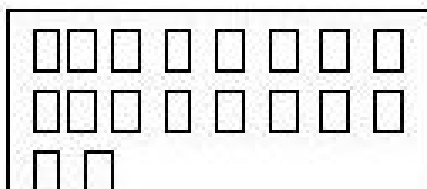
Aluno (a): _____

Atividade 5

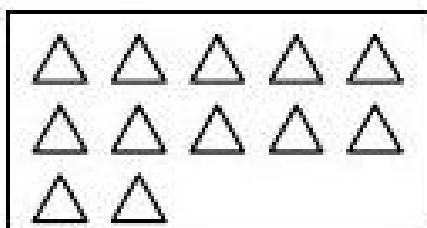
1. Conte os elementos em cada grupo e ligue ao seu numeral:




18



14



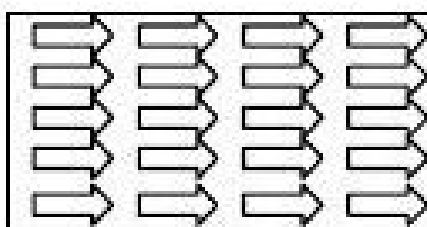
20



12



19



15



Aluno (a): _____





Atividade 6



Matemática

- ▶ Conceitos matemáticos
- ▶ Discriminação visual

✦ **LIGUE E RESPONDA: QUANTAS FLORES HÁ EM CADA VASO?**





Colégio São Marcos – Educação Infantil, Ensino Fundamental e Médio.

Jandaia do Sul, 16 de outubro de 2020.

Professora: Vanessa Crestani Men

Série: Infantil 4

Aluno (a): _____

Atividade 7

Pinte

